







# Comparing and Ordering Whole Numbers up to 1000

I can compare and order whole numbers up to 1000.



The pupils in Class 3 at Monster High need to line up in height order for their class photo. Draw an arrow on the number line and write their names underneath to put them in the correct order.







					
Warp 110cm	Grin 93cm	Ooze 324cm	Croc 284cm	Blob 403cm	Bugz 700cm

Complete the statements by writing < or > in each box.

93cm  110cm    284cm  324cm    700cm  403cm

284cm  110cm    403cm  700cm    284cm  403cm

Next, it's Class 4's turn for their photo so they need to line up in height order too. Draw an arrow on the number line and write their names underneath to put them in the correct order.

					
Clawz 210cm	Metallic 284cm	Dwarfly 938cm	Goofs 485cm	Oafy 550cm	Tickles 704cm







Complete the statements by writing < or > in each box.

938cm  485cm    210cm  550cm    284cm  210cm

704cm  938cm    210cm  284cm    485cm  704cm

# Comparing and Ordering Whole Numbers up to 1000 Answers

The pupils in Class 3 at Monster High need to line up in height order for their class photo. Draw an arrow on the number line and write their names underneath to put them in the correct order.

					
93cm	110cm	284cm	324cm	403cm	700cm







Complete the statements by writing < or > in each box.

93cm  110cm    284cm  324cm    700cm  403cm

284cm  110cm    403cm  700cm    284cm  403cm



Next, it's Class 4's turn for their photo so they need to line up in height order too. Draw an arrow on the number line and write their names underneath to put them in the correct order.

					
210cm	284cm	485cm	550cm	704cm	938cm

Complete the statements by writing < or > in each box.

938cm  485cm    210cm  550cm    284cm  210cm

704cm  938cm    210cm  284cm    485cm  704cm







# Comparing and Ordering Whole Numbers up to 1000



**REGENT STUDIES**  
Focused education on life's walk!  
www.regentstudies.com

I can compare and order whole numbers up to 1000.

The pupils in Class 3 at Monster High are all different heights. Draw a number line then draw an arrow with each monster's name on it to show how tall they are.

 Warp 345cm	 Grin 93cm	 Ooze 349cm	 Croc 284cm	 Blob 852cm	 Bugz 827cm
--	---	--	--	--	--







Complete the statements by writing  $<$  or  $>$  in each box.

93cm  827cm    827cm  852cm    349cm  284cm

284cm  93cm    582cm  852cm    345cm  349cm



Class 4 at Monster High have measured themselves too! Draw arrows and label them with the monster's names to show how tall they each are.

					
Clawz 204cm	Metallic 78cm	Dwarfy 240cm	Goofs 550cm	Oafy 505cm	Tickles 551cm


Complete the statements by writing < or > in each box.

78cm  204cm    204cm  240cm    204cm  78cm

550cm  505cm    550cm  551cm    505cm  551cm

# Comparing and Ordering Whole Numbers up to 1000 Answers

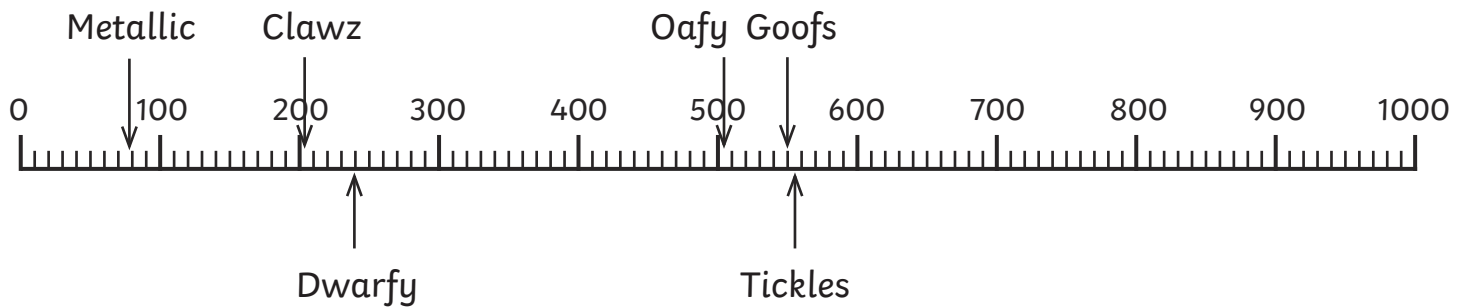
The pupils in Class 3 at Monster High are all different heights. Draw a number line then draw an arrow with each monster's name on it to show how tall they are.



Complete the statements by writing  $<$  or  $>$  in each box.

93cm  827cm    827cm  852cm    349cm  284cm

284cm  93cm    582cm  852cm    345cm  349cm



Complete the statements by writing  $<$  or  $>$  in each box.

78cm  204cm    204cm  240cm    204cm  78cm

550cm  505cm    550cm  551cm    505cm  551cm







# Comparing and Ordering Whole Numbers up to 1000

I can compare and order whole numbers up to 1000.



**REGENT STUDIES**  
 Focused education on life's walk!  
[www.regentstudies.com](http://www.regentstudies.com)

The pupils in Class 3 at Monster High are all different heights.

<input type="text"/>	<input type="text"/>	<input type="text"/>	<input type="text"/>	<input type="text"/>	<input type="text"/>
					
538cm	5.23m	153cm	1.03m	493cm	6m

Complete the statements by writing < or > in each box.

1.03m  6m      538cm  6m      5.23m  493cm

538cm  1.53cm      358cm  1.53cm      1.03m  523cm

Use the clues to write the correct name of each monster in the boxes above. Think about which clues are most useful starting points.

- Blob is taller than Ooze.
- Grin's height is the same as 523cm.
- Bugz is the tallest.
- Croc is the shortest.
- Ooze's height has a 5 in the tens column.
- Warp is exactly 62cm shorter than Bugz.

# Comparing and Ordering Whole Numbers up to 1000 Answers

I can compare and order whole numbers up to 1000.



**REGENT STUDIES**  
Focused education on life's walk!  
www.regentstudies.com

Complete the statements by writing < or > in each box.

1.03m  6m      538cm  6m      5.23m  493cm

358cm  1.53cm      538cm  1.53cm      1.03m  523cm

Monster	Height
Warp	538cm
Grin	5.23m
Ooze	153cm
Croc	1.03m
Blob	493cm
Bugz	6m